






Date: 29/8/2022
GRADE: II


CPE - 02 (2022-23)
MATHEMATICS

Max marks: 20
Time: 1 hour

General Instructions:

1. This question paper contains two parts A and B. Each part is compulsory.

Q.No.	Section A Do as directed	Mark
I 1	Choose the correct answer for the following questions. Choose the bigger number. a) 25 b) 68 c) 52	5X1=5
2	The object which can roll is _____. a)  b)  c) 	

3	<p>The number name for the number '20' is :</p> <p>a) two b) twelve c) twenty</p>	
4	<p>Identify the shape.</p>  <p>a) Sphere b) Cuboid c) Cylinder</p>	
5.	<p>Which of the following letter is formed of only curved lines.</p> <p>a) U b) V c) W</p>	
<p>II</p>	<p>Fill in the blanks.</p> <p>5. The number that comes after 48 is _____.</p> <p>6. Fill in the missing number. 65, 66, _____, 68, 69, 70.</p> <p>7. 2 tens and 6 ones make the number _____.</p>	<p>3X1=3</p>
<p>III</p>	<p>State whether the following sentences are true or false.</p> <p>8. A cone has 2 faces. _____</p> <p>9. The number 43 is smaller than 34. _____</p>	<p>2X1=2</p>

IV

Section B

Answer the following questions

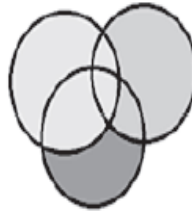
5X2=10

10. Circle the shapes that have only straight lines in red. Circle the shapes that have only curved lines in blue.

1.




2.



3.



4.



5.



11. Arrange the following numbers in ascending order.

34, 56, 12, 74, 28 _____

12. Make two numbers using the digits 3 and 7.

13. The following bundles have 10 sticks. Count the groups of Tens and ones and fill in the blanks.



Tens	Ones

The number is _____

14

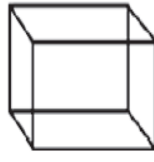
One of the following shapes have been wrongly named.
Circle that shape and write the shape in the blank.



Cylinder



Sphere



Cuboid



Cuboid



Cone

_____.

THE END

Prepared by: Ms. Treesa Anju

Checked by: Ms. Jimmy Joseph